

AutoCAD Course (2023 – 24) Assessment

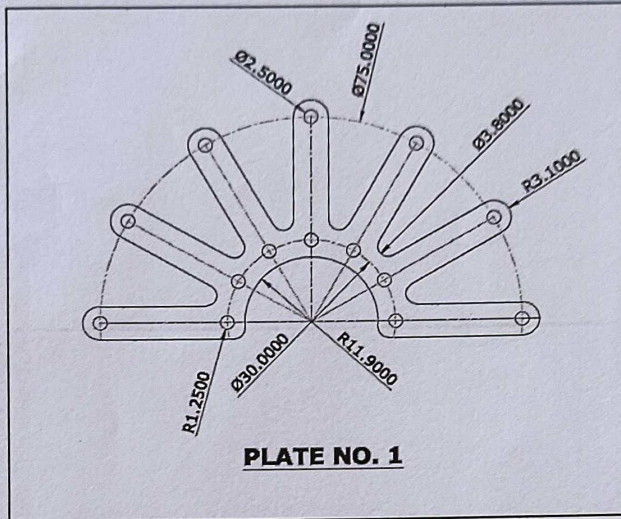
Time : 40 mins

Full Marks : 40

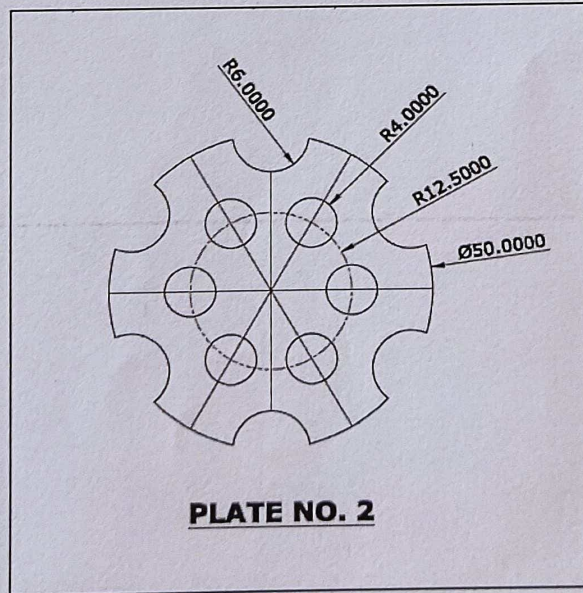
Q) Draw the following figures in AutoCAD software.


[20 x 2 = 40]

(i)



(ii)



  
Principal  
Regent Education & Research Foundation  
Bara Kanthalia, P.O.-Sewli Telinipara  
Barrackpore, Kolkata-700121